


# Halves and mixed numbers


a



b




c



d



e




$$\frac{1}{2}$$

$$1\frac{1}{2}$$

$$2\frac{1}{2}$$

$$3\frac{1}{2}$$

$$4\frac{1}{2}$$



How many of each food or drink item is there? Draw a line to match each picture to the correct amount. Then draw arrows pointing to where each number would go on the number line. The first is done for you. Add and label the others.



**ACTION** Draw and cut out 7 fish fingers. Share them between 2 people. How many will they get each?



**THINK** Draw a 0–10 number line. Mark on all the whole numbers and all the halves.

