


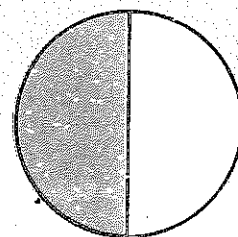
Halves, thirds and quarters




$$\frac{3}{4}$$




$$\frac{1}{2}$$




$$\frac{1}{3}$$




$$\frac{1}{4}$$



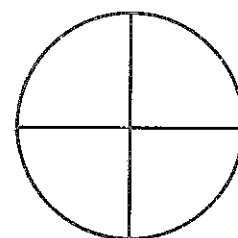
$$\frac{2}{3}$$




$$\frac{1}{2}$$




$$\frac{2}{3}$$



$$\frac{1}{4}$$



$$\frac{3}{4}$$



$$\frac{1}{3}$$

Draw a line matching each shape to the correct fraction.

Colour each shape on the bottom half of the page to match the fraction beneath it.



Cut out and fold the matching shapes on Resource sheet 598 to help you.



How many ways can you fold a square sheet of paper into quarters?