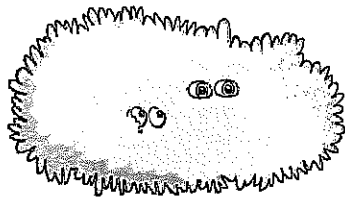




Twos



$2 \times 2 = \square$




$3 \times 2 = \square$




$4 \times 2 = \square$



$7 \times 2 = \square$



$5 \times 2 = \square$



$6 \times 2 = \square$



$8 \times 2 = \square$

Complete the multiplications to show the number of eyes hiding in each bush.



Make smiley faces from modelling dough. Put sets of faces together and count their eyes.



Investigate how many eyes there are in your classroom! Write a matching multiplication.