





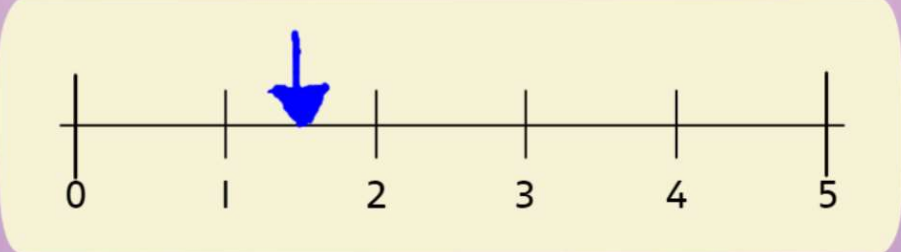


Monday	Tuesday	Wednesday	Thursday	Friday
				





Write your answers to the questions below and also show them on the number line with arrows. The first one is done for you.

1) How many leaves did the caterpillar eat on Monday?

$1\frac{1}{2}$

2) How many leaves did the caterpillar eat on Tuesday?

3) How many leaves did the caterpillar eat on Wednesday?

4) How many leaves did the caterpillar eat on Thursday?

5) How many leaves did the caterpillar eat on Friday?